

Work with Wall-e



Help Wall-e work out the halves of numbers and shapes, as he clears up in this puzzle worksheet.

Rubbish Stack

Wall-e has stacked 6 cubes of rubbish.

Circle half of the cubes.



Shape cutting

This shape needs to be cut in half.


Draw a line where Wall-e should cut.

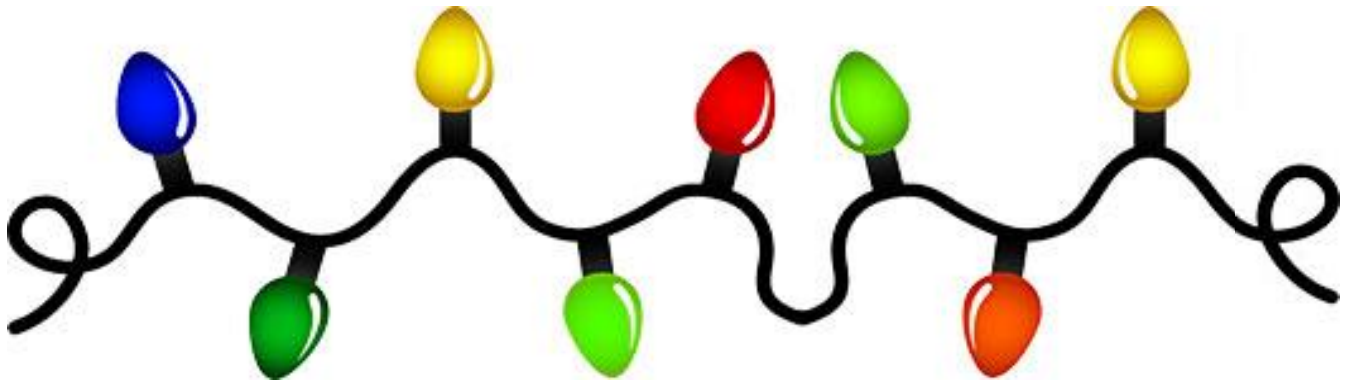


Billiard Balls

Wall-e found balls with numbers on them.

Which ball is half of 10?






Fairy Lights

Wall-e loves lights! Circle half of the light bulbs.

How many did you circle?



Collectables

Wall-e collects interesting objects that he finds. He has found lots of lightbulbs!

Half the lightbulbs are yellow. Colour them in.

